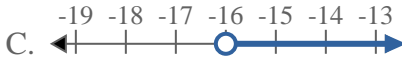


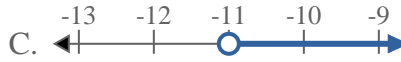


Solve each problem.

1) Which option best shows  $X > -16$



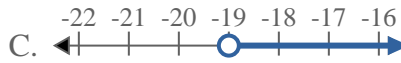
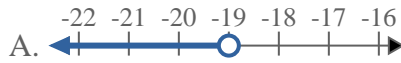
2) Which option best shows  $X \geq -11$



3) Which option best shows  $X \leq -18$



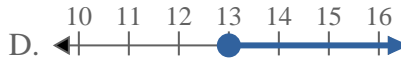
4) Which option best shows  $X > -19$



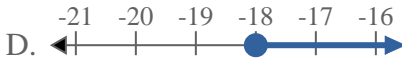
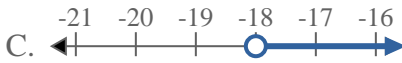
5) Which option best shows  $X < -15$



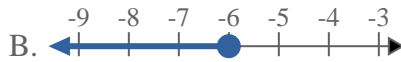
6) Which option best shows  $X \leq 13$



7) Which option best shows  $X > -18$



8) Which option best shows  $X < -6$



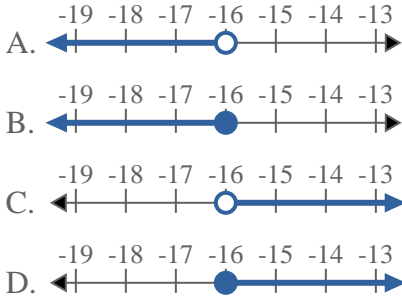
Answers

1. \_\_\_\_\_
2. \_\_\_\_\_
3. \_\_\_\_\_
4. \_\_\_\_\_
5. \_\_\_\_\_
6. \_\_\_\_\_
7. \_\_\_\_\_
8. \_\_\_\_\_

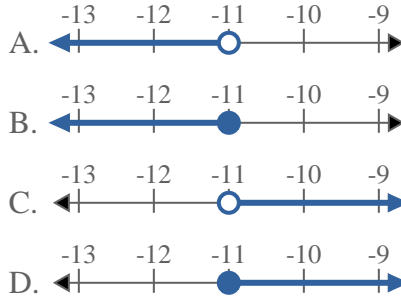


Solve each problem.

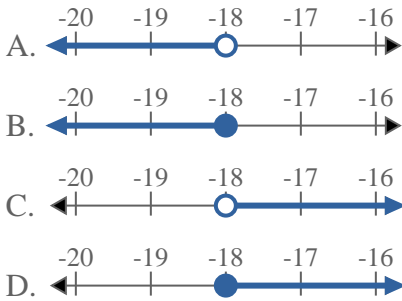
1) Which option best shows  $X > -16$



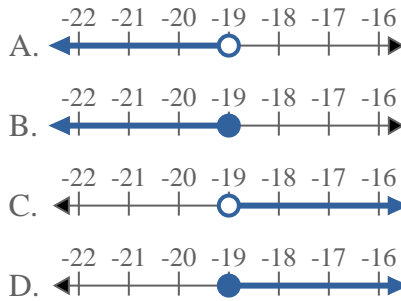
2) Which option best shows  $X \geq -11$



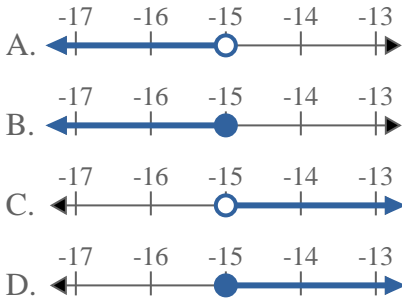
3) Which option best shows  $X \leq -18$



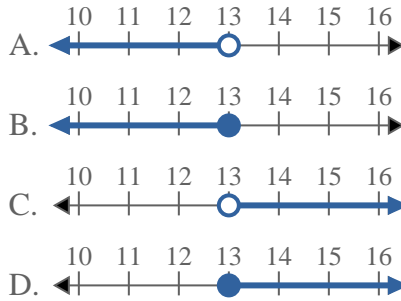
4) Which option best shows  $X > -19$



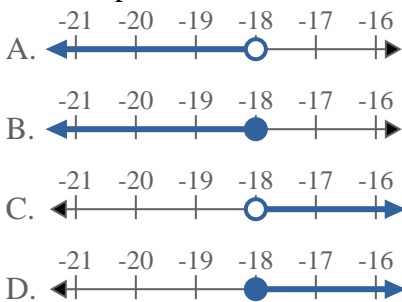
5) Which option best shows  $X < -15$



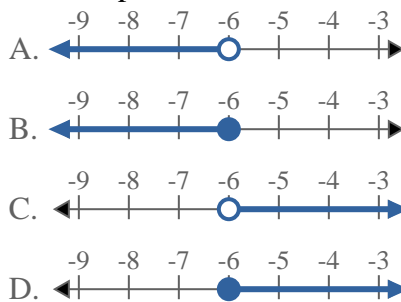
6) Which option best shows  $X \leq 13$



7) Which option best shows  $X > -18$



8) Which option best shows  $X < -6$



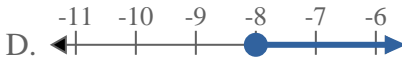
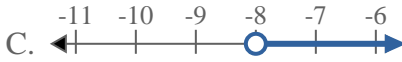
Answers

1.     **C**
2.     **D**
3.     **B**
4.     **C**
5.     **A**
6.     **B**
7.     **C**
8.     **A**

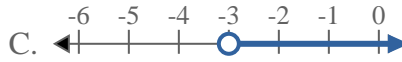
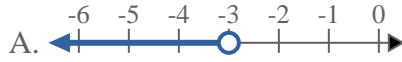


Solve each problem.

1) Which option best shows  $X > -8$



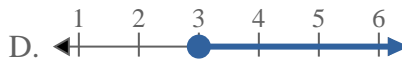
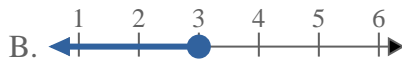
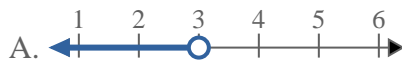
2) Which option best shows  $X \leq -3$



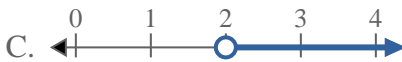
3) Which option best shows  $X \leq 19$



4) Which option best shows  $X < 3$



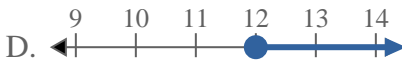
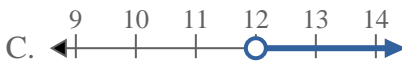
5) Which option best shows  $X \leq 2$



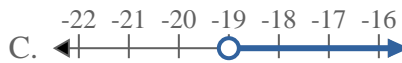
6) Which option best shows  $X > 2$



7) Which option best shows  $X > 12$



8) Which option best shows  $X < -19$



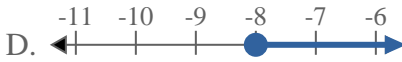
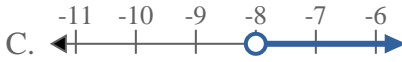
Answers

1. \_\_\_\_\_
2. \_\_\_\_\_
3. \_\_\_\_\_
4. \_\_\_\_\_
5. \_\_\_\_\_
6. \_\_\_\_\_
7. \_\_\_\_\_
8. \_\_\_\_\_

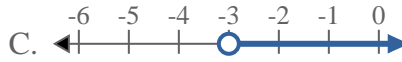
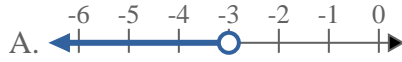


Solve each problem.

1) Which option best shows  $X > -8$



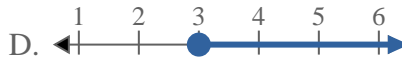
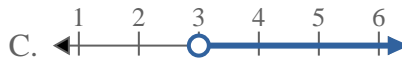
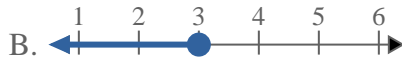
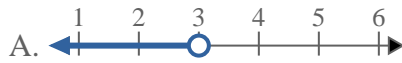
2) Which option best shows  $X \leq -3$



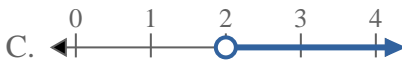
3) Which option best shows  $X \leq 19$



4) Which option best shows  $X < 3$



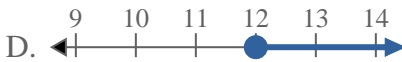
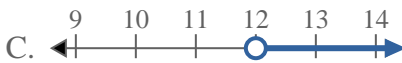
5) Which option best shows  $X \leq 2$



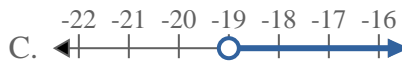
6) Which option best shows  $X > 2$



7) Which option best shows  $X > 12$



8) Which option best shows  $X < -19$



Answers

1. C

2. B

3. B

4. A

5. B

6. C

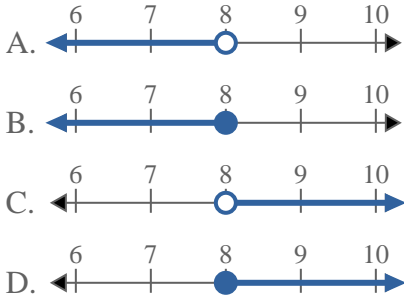
7. C

8. A

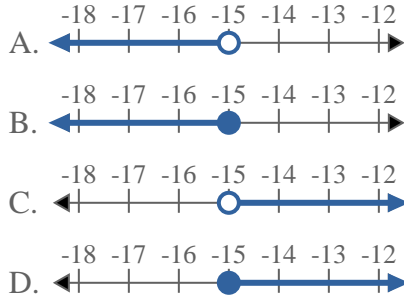


Solve each problem.

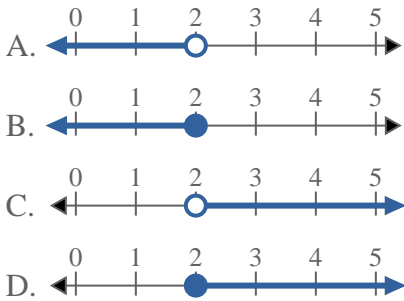
1) Which option best shows  $X \geq 8$



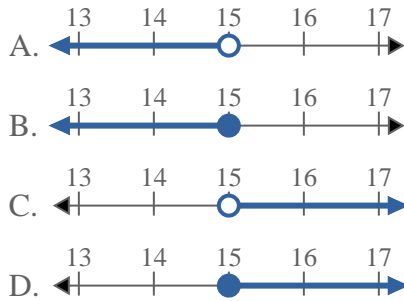
2) Which option best shows  $X > -15$



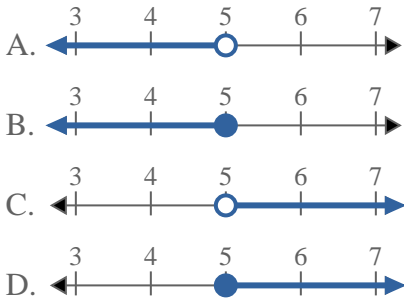
3) Which option best shows  $X \geq 2$



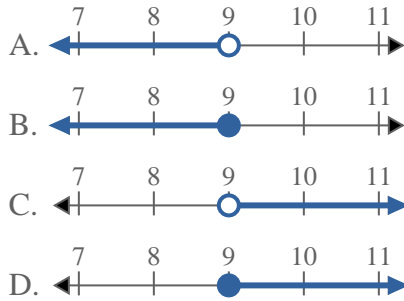
4) Which option best shows  $X \leq 15$



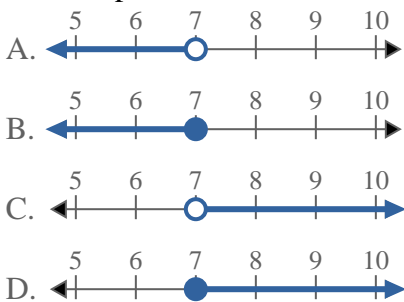
5) Which option best shows  $X \leq 5$



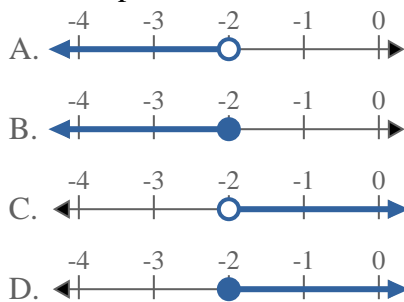
6) Which option best shows  $X \leq 9$



7) Which option best shows  $X \geq 7$



8) Which option best shows  $X \geq -2$



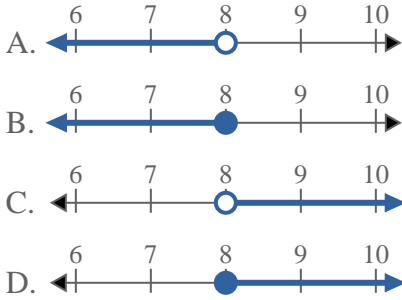
Answers

1. \_\_\_\_\_
2. \_\_\_\_\_
3. \_\_\_\_\_
4. \_\_\_\_\_
5. \_\_\_\_\_
6. \_\_\_\_\_
7. \_\_\_\_\_
8. \_\_\_\_\_

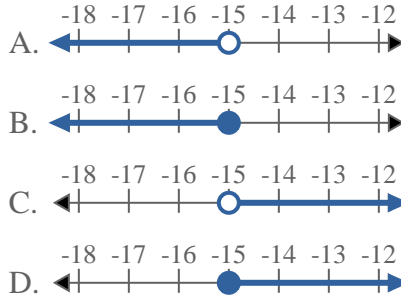


Solve each problem.

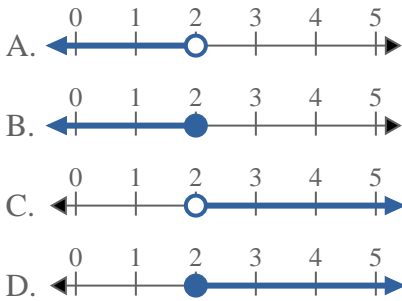
1) Which option best shows  $X \geq 8$



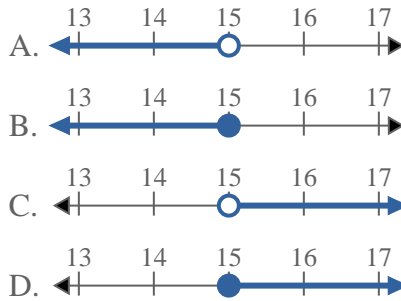
2) Which option best shows  $X > -15$



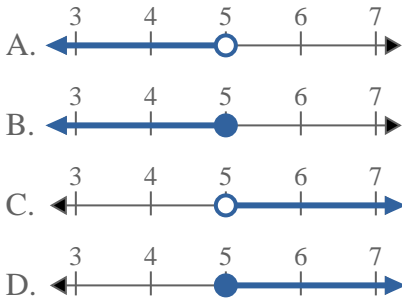
3) Which option best shows  $X \geq 2$



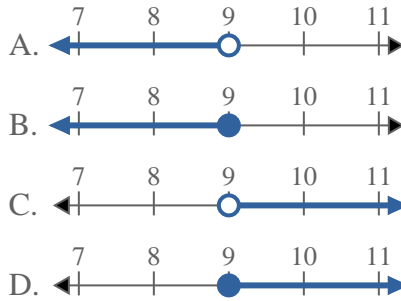
4) Which option best shows  $X \leq 15$



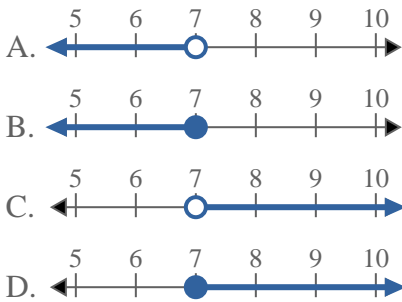
5) Which option best shows  $X \leq 5$



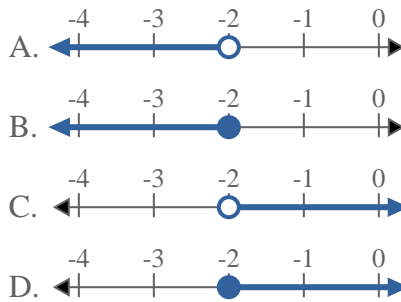
6) Which option best shows  $X \leq 9$



7) Which option best shows  $X \geq 7$



8) Which option best shows  $X \geq -2$



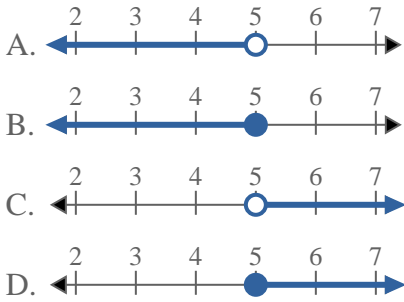
Answers

1.     **D**
2.     **C**
3.     **D**
4.     **B**
5.     **B**
6.     **B**
7.     **D**
8.     **D**

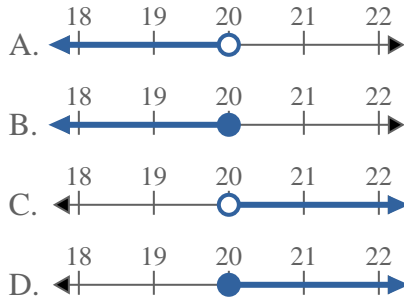


Solve each problem.

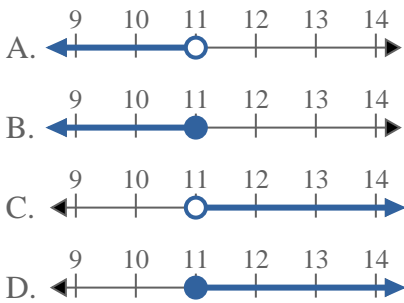
1) Which option best shows  $X < 5$



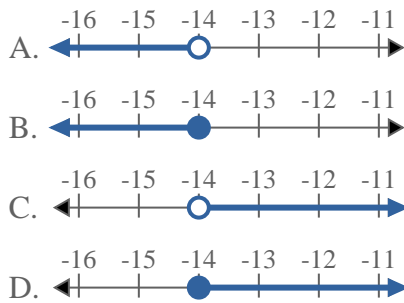
2) Which option best shows  $X < 20$



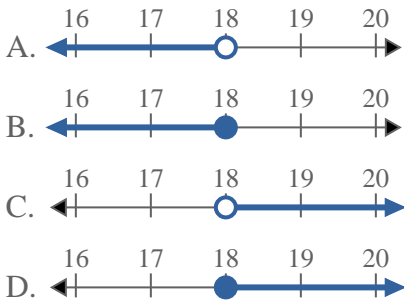
3) Which option best shows  $X < 11$



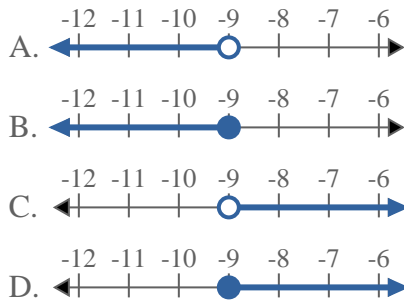
4) Which option best shows  $X \leq -14$



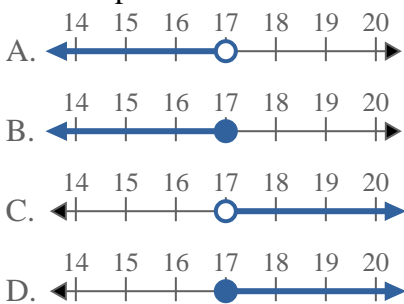
5) Which option best shows  $X \geq 18$



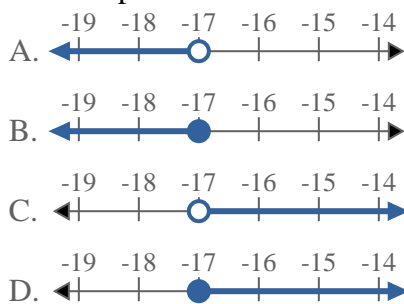
6) Which option best shows  $X > -9$



7) Which option best shows  $X < 17$



8) Which option best shows  $X < -17$



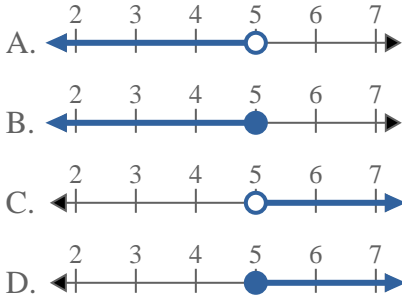
Answers

1. \_\_\_\_\_
2. \_\_\_\_\_
3. \_\_\_\_\_
4. \_\_\_\_\_
5. \_\_\_\_\_
6. \_\_\_\_\_
7. \_\_\_\_\_
8. \_\_\_\_\_

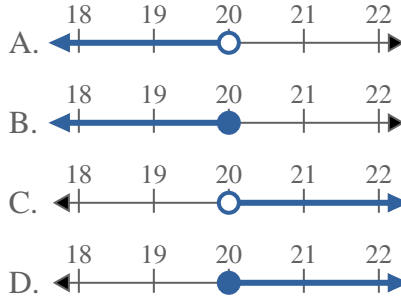


Solve each problem.

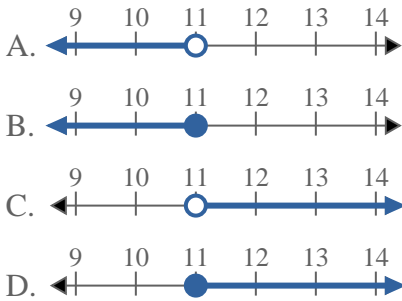
1) Which option best shows  $X < 5$



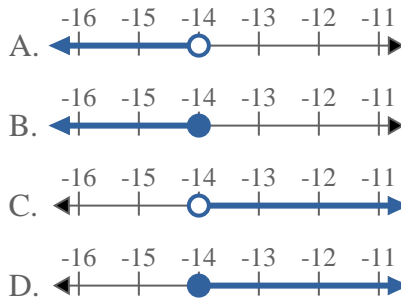
2) Which option best shows  $X < 20$



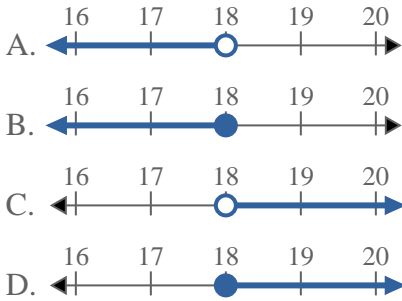
3) Which option best shows  $X < 11$



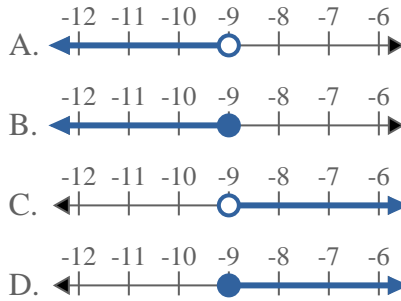
4) Which option best shows  $X \leq -14$



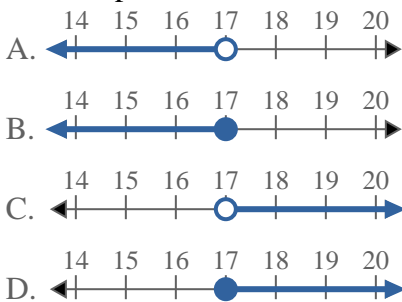
5) Which option best shows  $X \geq 18$



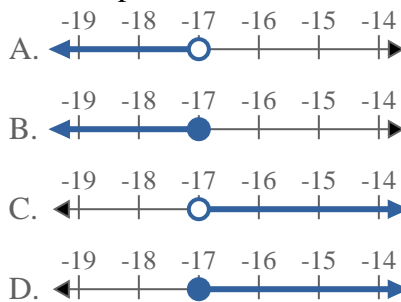
6) Which option best shows  $X > -9$



7) Which option best shows  $X < 17$



8) Which option best shows  $X < -17$



Answers

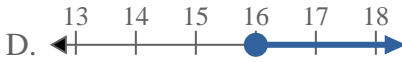
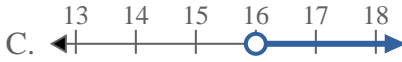
1.   **A**
2.   **A**
3.   **A**
4.   **B**
5.   **D**
6.   **C**
7.   **A**
8.   **A**





Solve each problem.

1) Which option best shows  $X < 16$



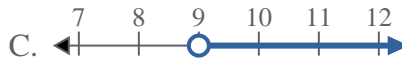
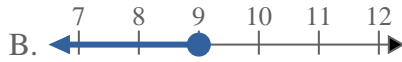
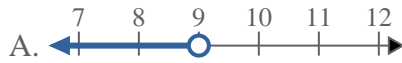
2) Which option best shows  $X < 4$



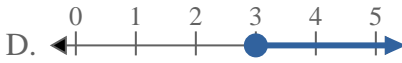
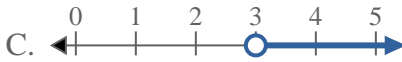
3) Which option best shows  $X < -19$



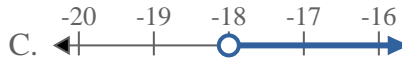
4) Which option best shows  $X \geq 9$



5) Which option best shows  $X < 3$



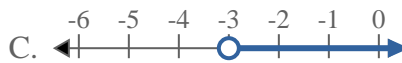
6) Which option best shows  $X \geq -18$



7) Which option best shows  $X < -12$



8) Which option best shows  $X \geq -3$



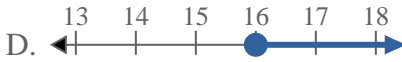
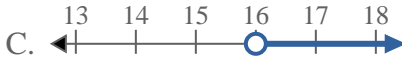
Answers

1. \_\_\_\_\_
2. \_\_\_\_\_
3. \_\_\_\_\_
4. \_\_\_\_\_
5. \_\_\_\_\_
6. \_\_\_\_\_
7. \_\_\_\_\_
8. \_\_\_\_\_



Solve each problem.

1) Which option best shows  $X < 16$



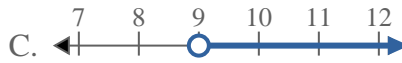
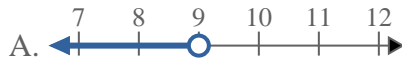
2) Which option best shows  $X < 4$



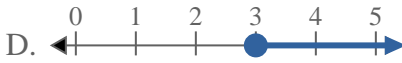
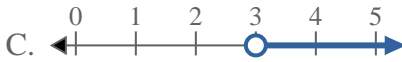
3) Which option best shows  $X < -19$



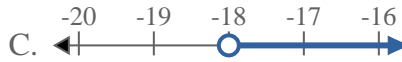
4) Which option best shows  $X \geq 9$



5) Which option best shows  $X < 3$



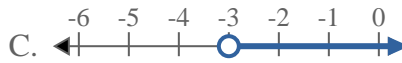
6) Which option best shows  $X \geq -18$



7) Which option best shows  $X < -12$



8) Which option best shows  $X \geq -3$



Answers

1.   **A**  

2.   **A**  

3.   **A**  

4.   **D**  

5.   **A**  

6.   **D**  

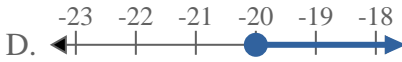
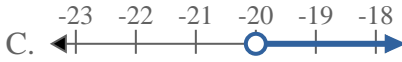
7.   **A**  

8.   **D**

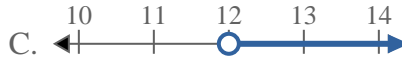


Solve each problem.

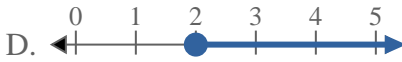
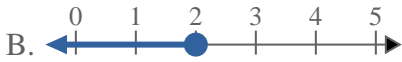
1) Which option best shows  $X > -20$



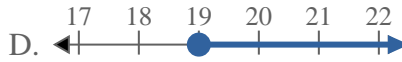
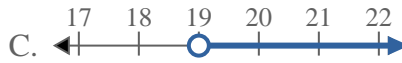
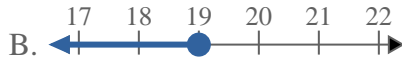
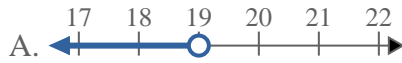
2) Which option best shows  $X > 12$



3) Which option best shows  $X \leq 2$



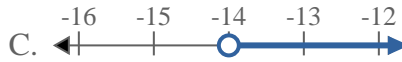
4) Which option best shows  $X > 19$



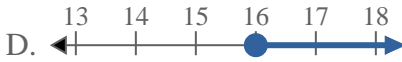
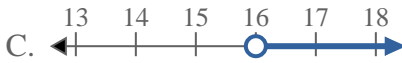
5) Which option best shows  $X \geq -10$



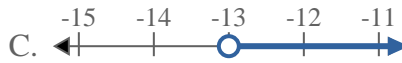
6) Which option best shows  $X < -14$



7) Which option best shows  $X \leq 16$



8) Which option best shows  $X < -13$



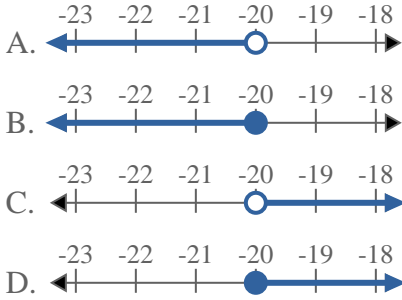
Answers

1. \_\_\_\_\_
2. \_\_\_\_\_
3. \_\_\_\_\_
4. \_\_\_\_\_
5. \_\_\_\_\_
6. \_\_\_\_\_
7. \_\_\_\_\_
8. \_\_\_\_\_

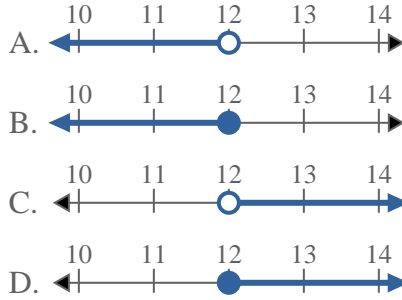


Solve each problem.

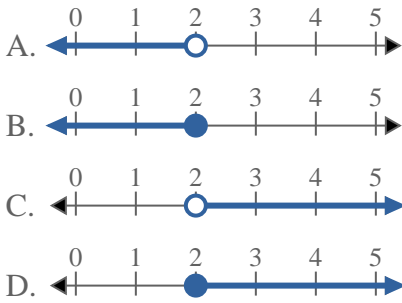
1) Which option best shows  $X > -20$



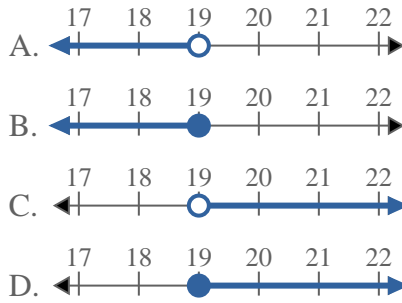
2) Which option best shows  $X > 12$



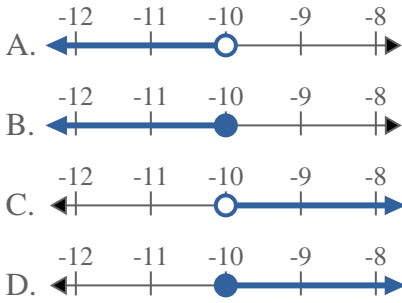
3) Which option best shows  $X \leq 2$



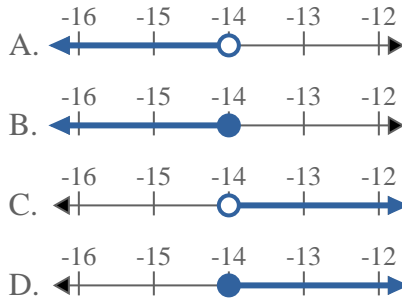
4) Which option best shows  $X > 19$



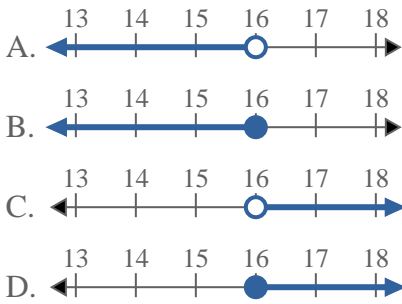
5) Which option best shows  $X \geq -10$



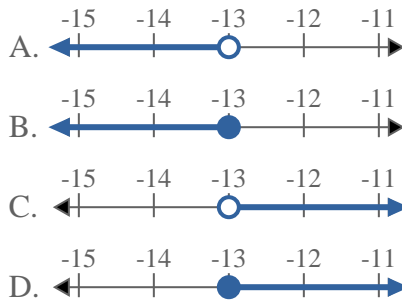
6) Which option best shows  $X < -14$



7) Which option best shows  $X \leq 16$



8) Which option best shows  $X < -13$



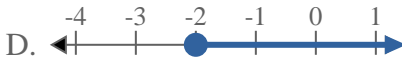
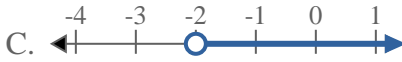
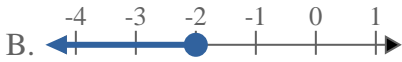
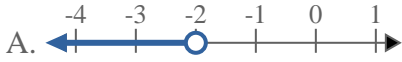
Answers

1.     **C**
2.     **C**
3.     **B**
4.     **C**
5.     **D**
6.     **A**
7.     **B**
8.     **A**

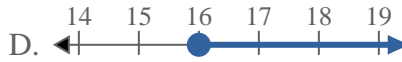
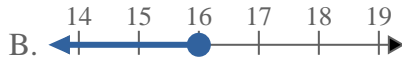
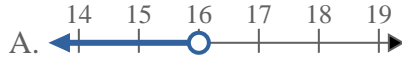


Solve each problem.

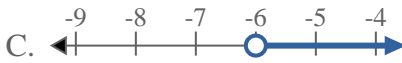
1) Which option best shows  $X < -2$



2) Which option best shows  $X \leq 16$



3) Which option best shows  $X < -6$



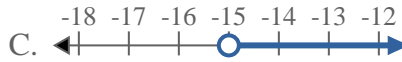
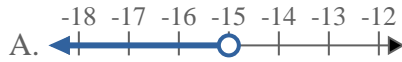
4) Which option best shows  $X \leq 13$



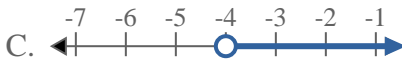
5) Which option best shows  $X < 11$



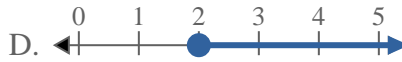
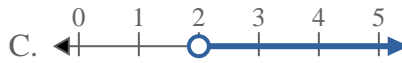
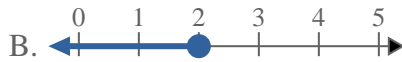
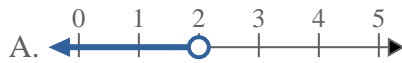
6) Which option best shows  $X \leq -15$



7) Which option best shows  $X \geq -4$



8) Which option best shows  $X > 2$



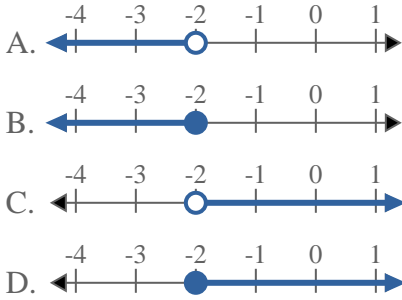
Answers

1. \_\_\_\_\_
2. \_\_\_\_\_
3. \_\_\_\_\_
4. \_\_\_\_\_
5. \_\_\_\_\_
6. \_\_\_\_\_
7. \_\_\_\_\_
8. \_\_\_\_\_

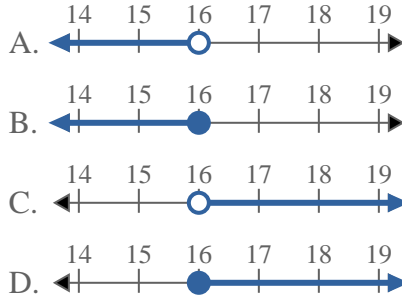


Solve each problem.

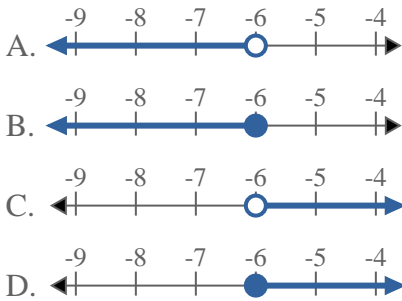
1) Which option best shows  $X < -2$



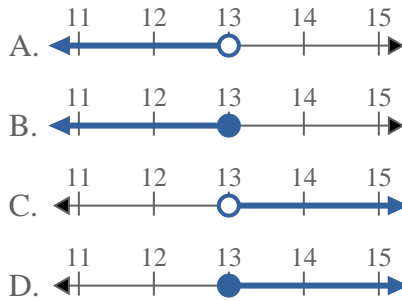
2) Which option best shows  $X \leq 16$



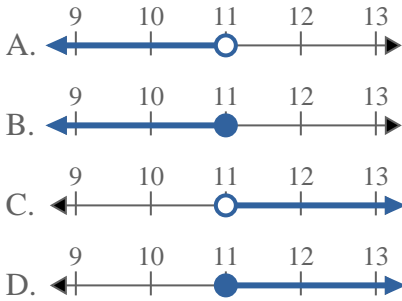
3) Which option best shows  $X < -6$



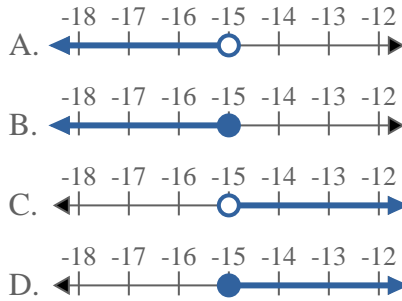
4) Which option best shows  $X \leq 13$



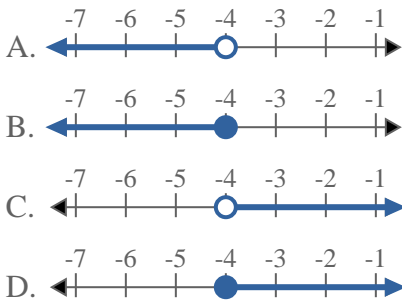
5) Which option best shows  $X < 11$



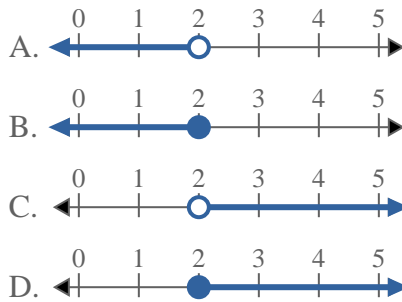
6) Which option best shows  $X \leq -15$



7) Which option best shows  $X \geq -4$



8) Which option best shows  $X > 2$



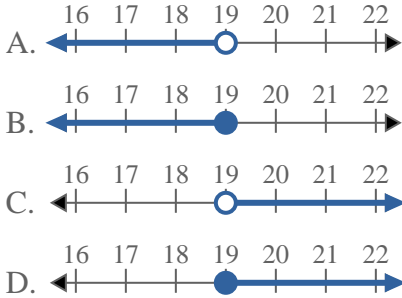
Answers

1.   **A**
2.   **B**
3.   **A**
4.   **B**
5.   **A**
6.   **B**
7.   **D**
8.   **C**

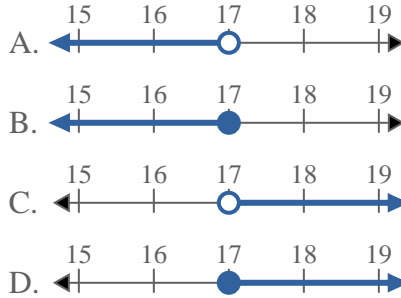


Solve each problem.

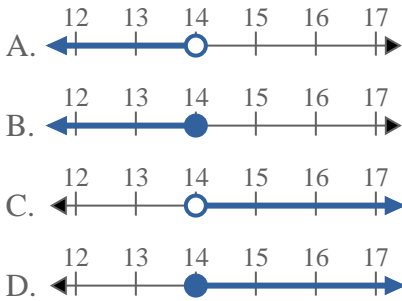
1) Which option best shows  $X \leq 19$



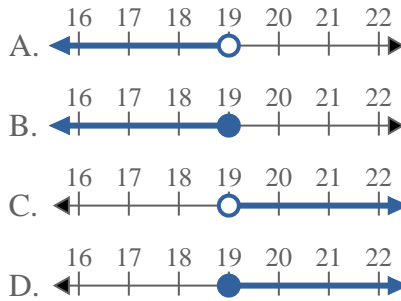
2) Which option best shows  $X \geq 17$



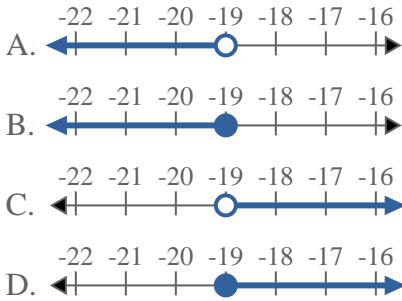
3) Which option best shows  $X \geq 14$



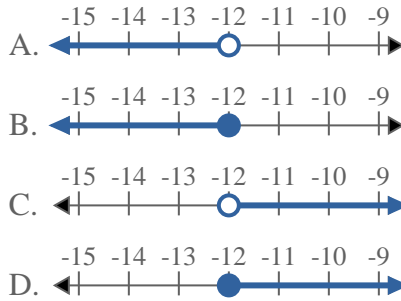
4) Which option best shows  $X < 19$



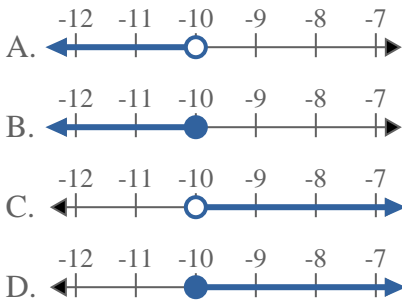
5) Which option best shows  $X > -19$



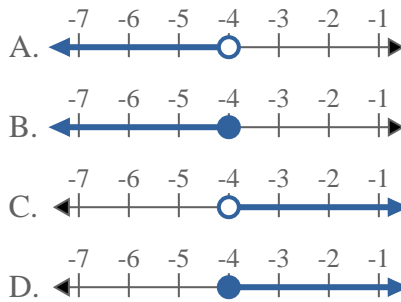
6) Which option best shows  $X \geq -12$



7) Which option best shows  $X \geq -10$



8) Which option best shows  $X \geq -4$



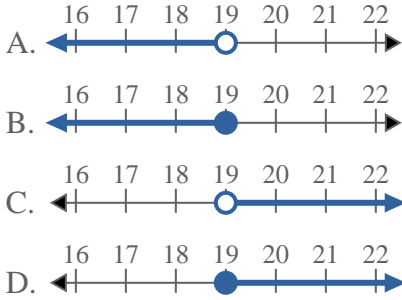
Answers

1. \_\_\_\_\_
2. \_\_\_\_\_
3. \_\_\_\_\_
4. \_\_\_\_\_
5. \_\_\_\_\_
6. \_\_\_\_\_
7. \_\_\_\_\_
8. \_\_\_\_\_

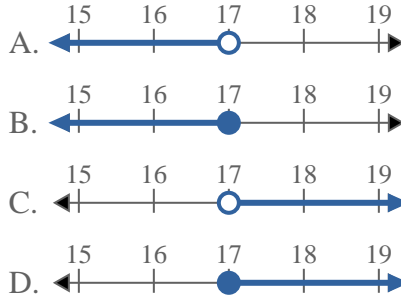


Solve each problem.

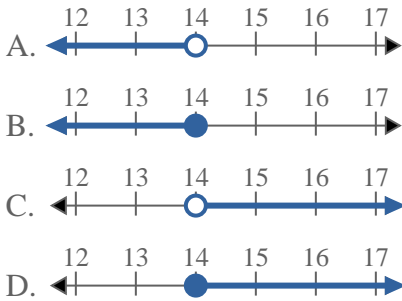
1) Which option best shows  $X \leq 19$



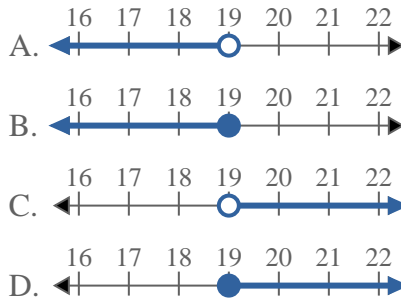
2) Which option best shows  $X \geq 17$



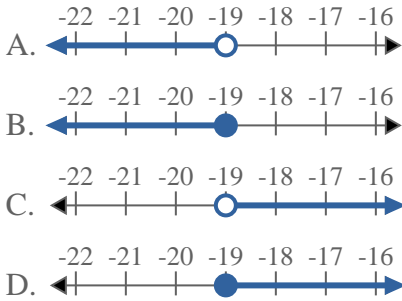
3) Which option best shows  $X \geq 14$



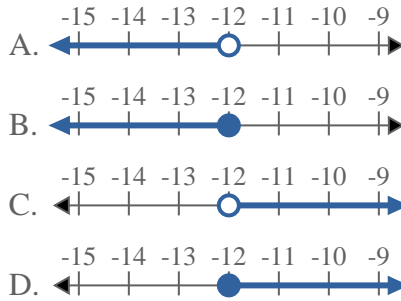
4) Which option best shows  $X < 19$



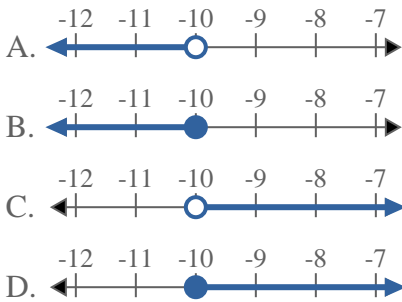
5) Which option best shows  $X > -19$



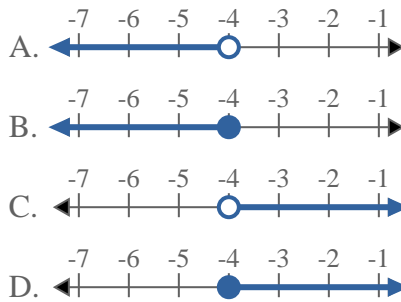
6) Which option best shows  $X \geq -12$



7) Which option best shows  $X \geq -10$



8) Which option best shows  $X \geq -4$



Answers

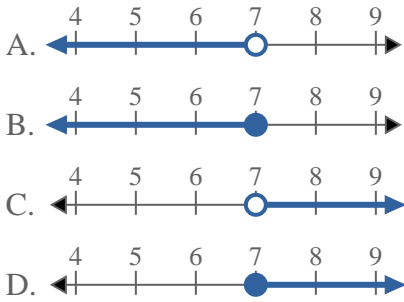
1.     **B**
2.     **D**
3.     **D**
4.     **A**
5.     **C**
6.     **D**
7.     **D**
8.     **D**



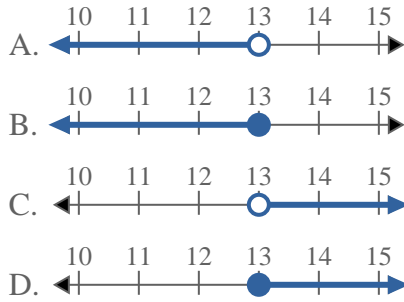


Solve each problem.

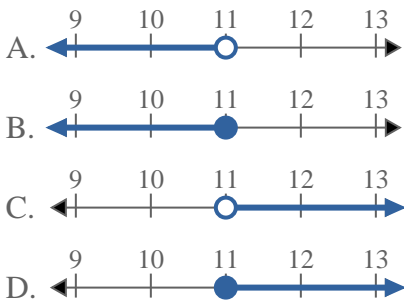
1) Which option best shows  $X > 7$



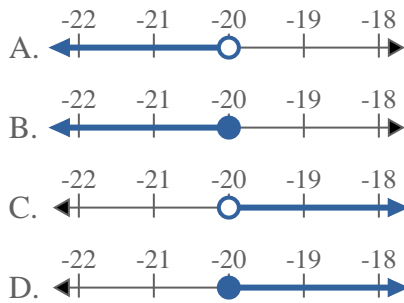
2) Which option best shows  $X \geq 13$



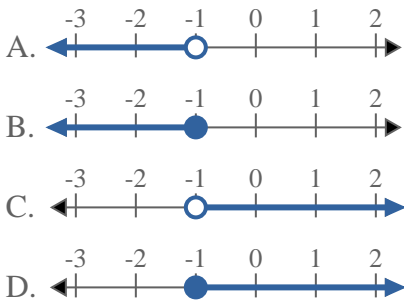
3) Which option best shows  $X < 11$



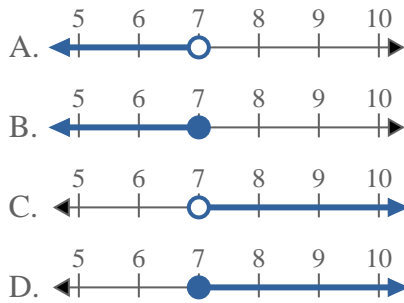
4) Which option best shows  $X \leq -20$



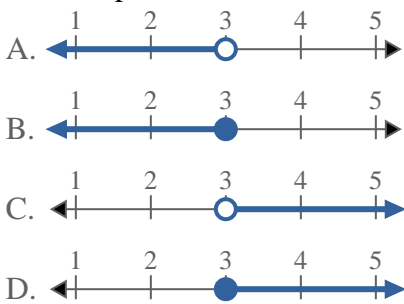
5) Which option best shows  $X \leq -1$



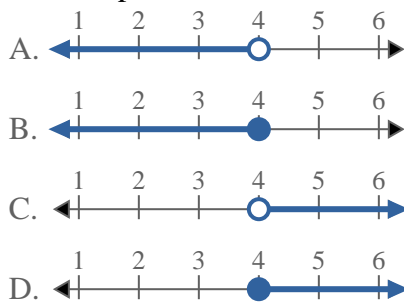
6) Which option best shows  $X < 7$



7) Which option best shows  $X \leq 3$



8) Which option best shows  $X > 4$



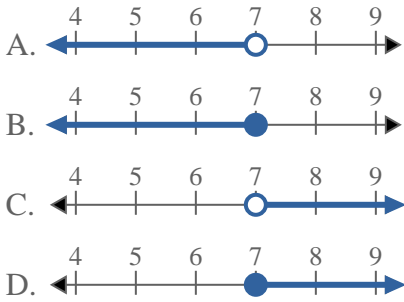
Answers

1. \_\_\_\_\_
2. \_\_\_\_\_
3. \_\_\_\_\_
4. \_\_\_\_\_
5. \_\_\_\_\_
6. \_\_\_\_\_
7. \_\_\_\_\_
8. \_\_\_\_\_

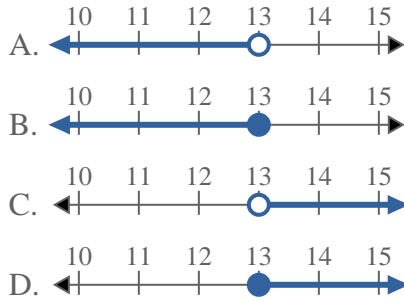


Solve each problem.

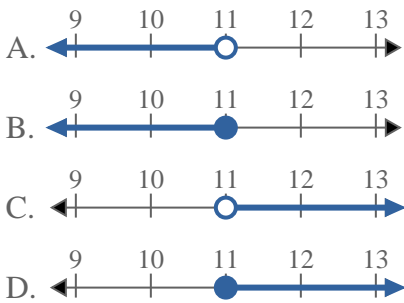
1) Which option best shows  $X > 7$



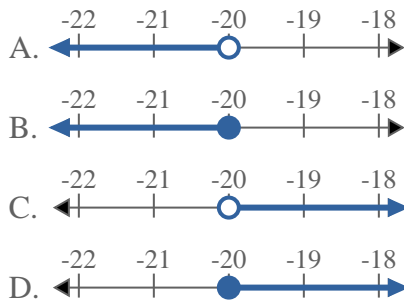
2) Which option best shows  $X \geq 13$



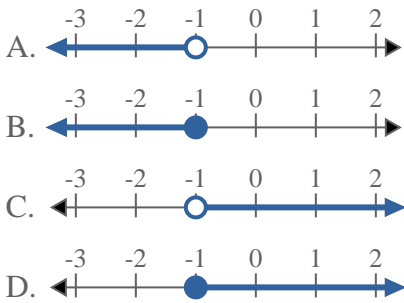
3) Which option best shows  $X < 11$



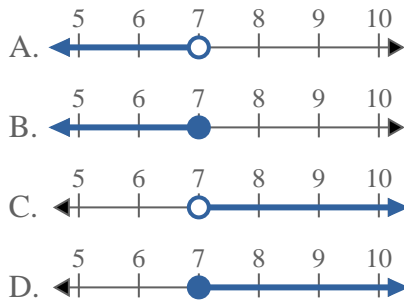
4) Which option best shows  $X \leq -20$



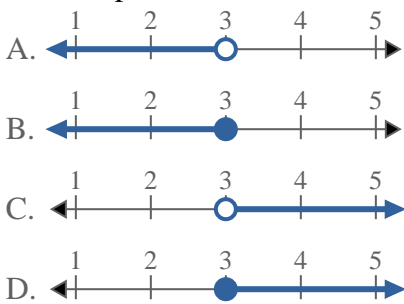
5) Which option best shows  $X \leq -1$



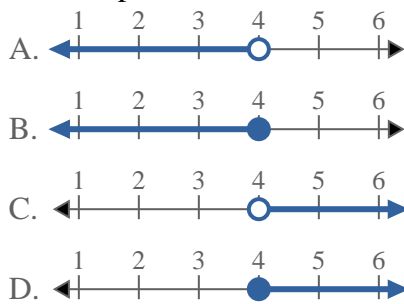
6) Which option best shows  $X < 7$



7) Which option best shows  $X \leq 3$



8) Which option best shows  $X > 4$



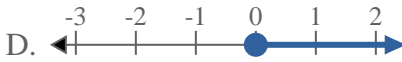
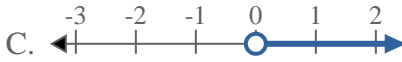
Answers

1.     **C**
2.     **D**
3.     **A**
4.     **B**
5.     **B**
6.     **A**
7.     **B**
8.     **C**



Solve each problem.

1) Which option best shows  $X \leq 0$



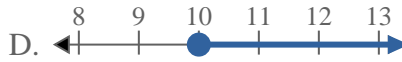
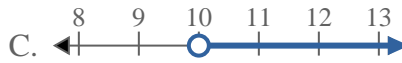
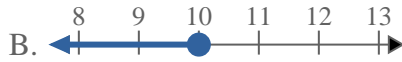
2) Which option best shows  $X \leq 14$



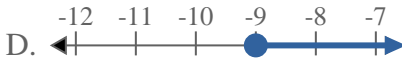
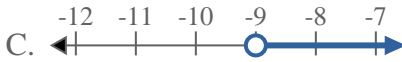
3) Which option best shows  $X < 7$



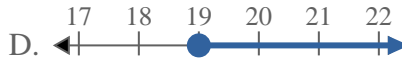
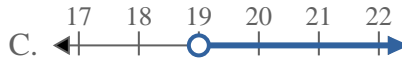
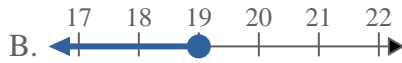
4) Which option best shows  $X > 10$



5) Which option best shows  $X \leq -9$



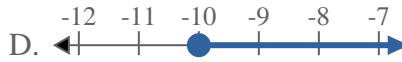
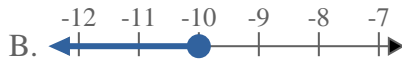
6) Which option best shows  $X \leq 19$



7) Which option best shows  $X > -18$



8) Which option best shows  $X \leq -10$



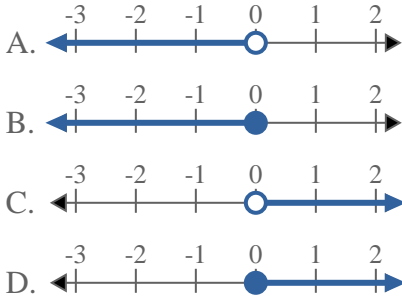
**Answers**

1. \_\_\_\_\_
2. \_\_\_\_\_
3. \_\_\_\_\_
4. \_\_\_\_\_
5. \_\_\_\_\_
6. \_\_\_\_\_
7. \_\_\_\_\_
8. \_\_\_\_\_

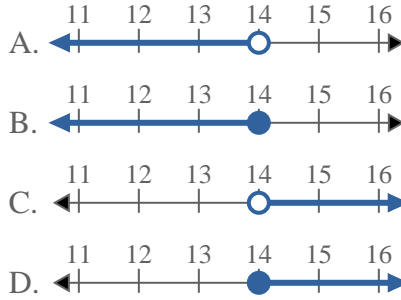


Solve each problem.

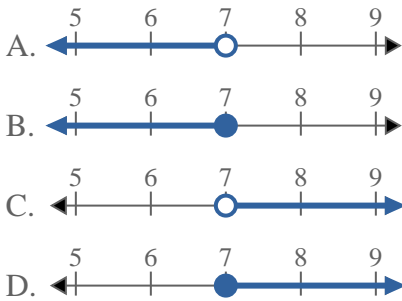
1) Which option best shows  $X \leq 0$



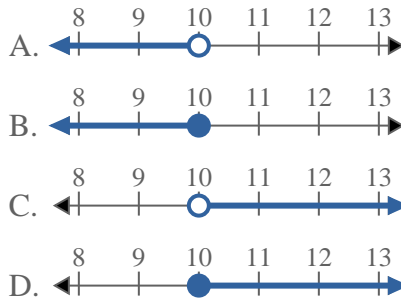
2) Which option best shows  $X \leq 14$



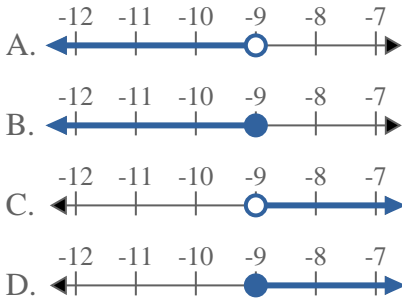
3) Which option best shows  $X < 7$



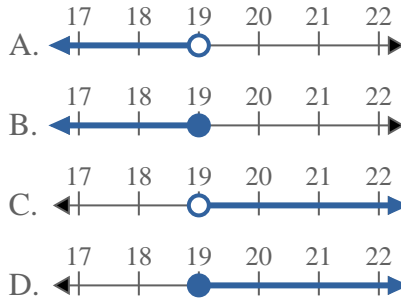
4) Which option best shows  $X > 10$



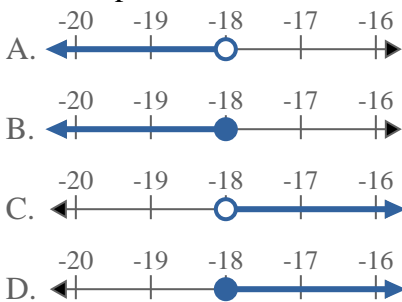
5) Which option best shows  $X \leq -9$



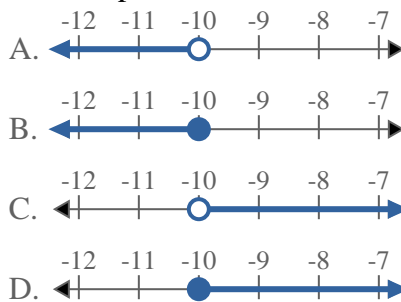
6) Which option best shows  $X \leq 19$



7) Which option best shows  $X > -18$



8) Which option best shows  $X \leq -10$



Answers

1.     **B**
2.     **B**
3.     **A**
4.     **C**
5.     **B**
6.     **B**
7.     **C**
8.     **B**